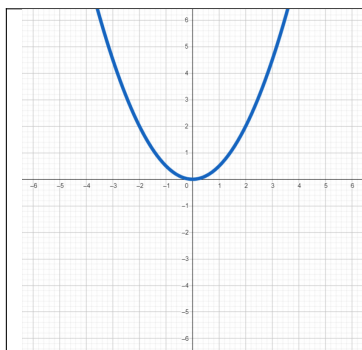


Exercise 1

Calc. : ✖

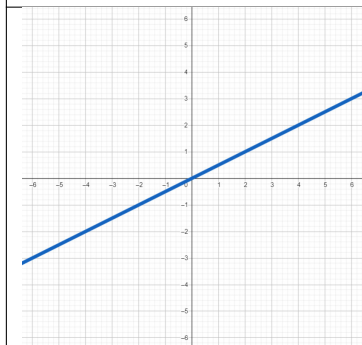
Relaciona, asignando el número que corresponda en cada caso, la gráfica con la expresión analítica que corresponda.

10 marks



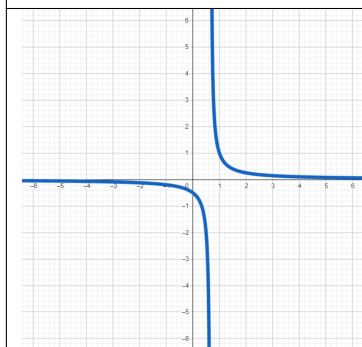
1

$$y = \frac{1}{3x-2}$$



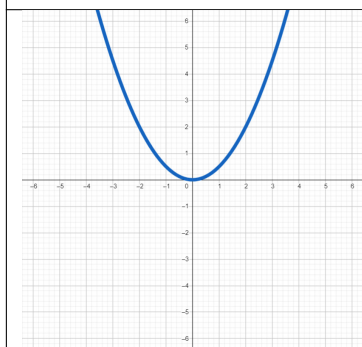
2

$$y = \sqrt{3x+1}$$



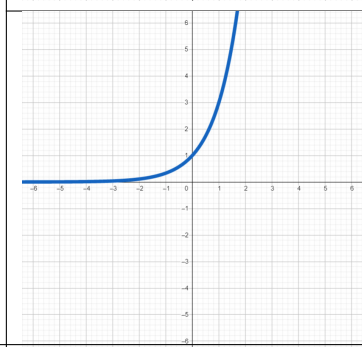
3

$$y = \frac{1}{2}x^2$$



4

$$y = 3^x$$



5

$$y = \frac{1}{2}x$$