

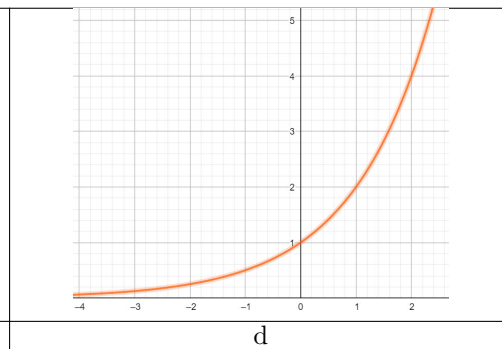
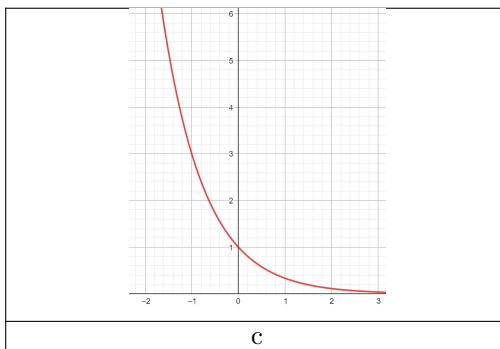
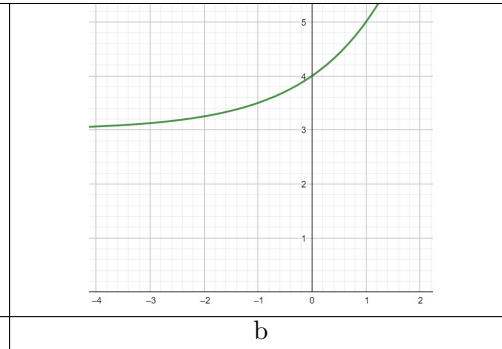
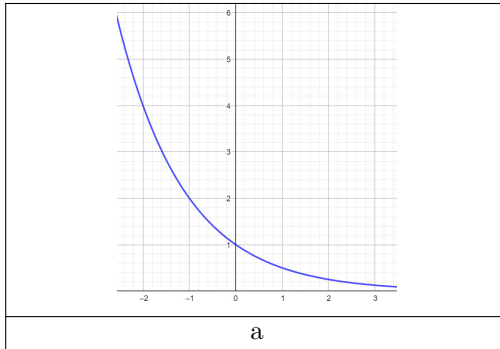
Exercise 1

Calc. : ✖

8 marks

Match each of the following functions to their corresponding graph.

Function	$f(x) = 2^{2x} + 3$	$g(x) = 3^{-x}$	$h(x) = 0.5^x$	$q(x) = 2^x$
Graph				



Exercise 2

Calc. : ✖

8 marks

Ordnen Sie jeder Funktionsgleichung den passenden Funktionsgraphen zu.

Funktion	$f(x) = 2^{2x} + 3$	$g(x) = 3^{-x}$	$h(x) = 0.5^x$	$q(x) = 2^x$
Graph				

